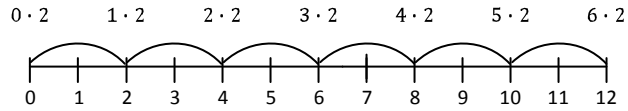


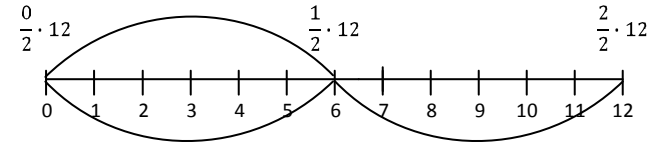
$$12 \div 2$$

How many groups of 2 are in 12?



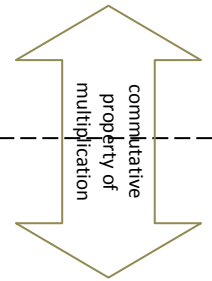
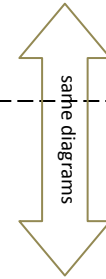
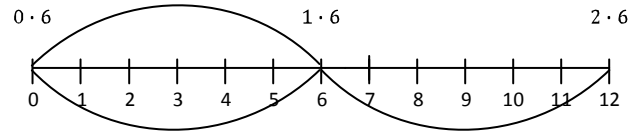
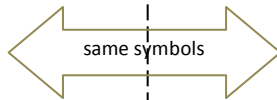
$$\frac{1}{2} \cdot 12$$

How much is one-half copy of 12?



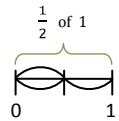
$$12 \div 2$$

12 divided into 2 equal groups. How much in 1 group?

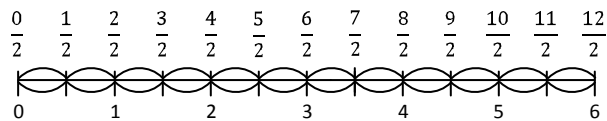


$$\frac{12}{2}$$

How much is 12 halves?

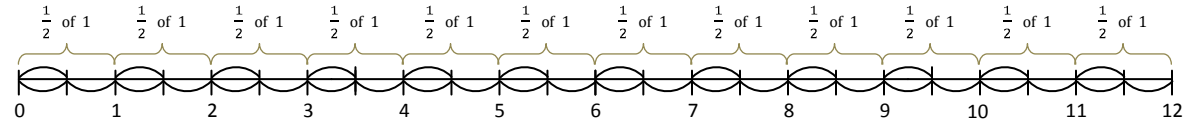


Make 12 copies of $\frac{1}{2}$



$$12 \cdot \frac{1}{2} (1)$$

How much is 12 copies of one-half?



Take $\frac{1}{2}$ of each unit, then concatenate those halves.

